



Fill in the blanks to find the amounts.

**Answers**

Ex)

1)

2)

Ex. 4

1. \_\_\_\_\_

2. \_\_\_\_\_

3. \_\_\_\_\_

4. \_\_\_\_\_

5. \_\_\_\_\_

6. \_\_\_\_\_

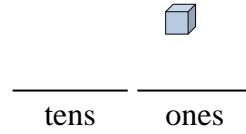
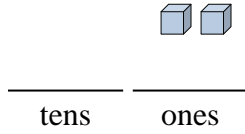
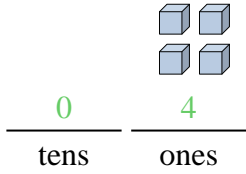
7. \_\_\_\_\_

8. \_\_\_\_\_

9. \_\_\_\_\_

10. \_\_\_\_\_

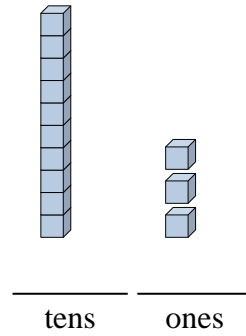
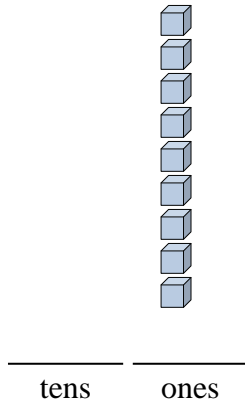
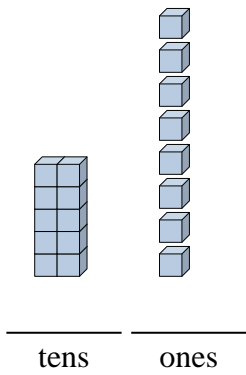
11. \_\_\_\_\_



3)

4)

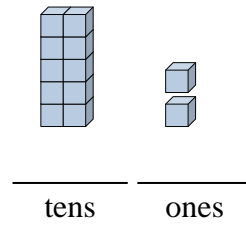
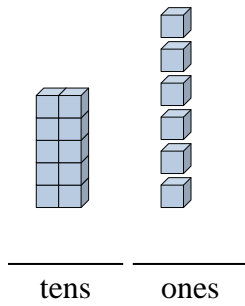
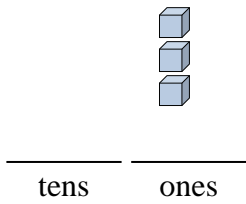
5)



6)

7)

8)



9)

10)

11)

